



MID TERM EXAMINATION, 2023-24  
SUBJECT-SOCIAL SCIENCE

CLASS: IV  
Time Allowed: 1.5 Hours  
Admission No: -----

DATE: 09/10/2023  
Maximum Marks: 40  
Roll No: -----

Q.1. Choose the correct answer and fill in the blanks: (1×10=10)

1. India is divided into \_\_\_\_\_ states and \_\_\_\_\_ union territories. 1  
a.31/9                      b.28/8                      c.29/7                      d.30/4
2. A long row of mountain is called \_\_\_\_\_. 1  
a. A pass    b. A peak    c. A range                      d. A hill
3. The Foothills of the Outer Himalayas is known as \_\_\_\_\_. 1  
a. Bangar                      b. Khadar                      c. Tarai                      d. Alluvial
4. Aeroplane is made from \_\_\_\_\_. 1  
a. Copper                      b. Steel                      c. Aluminum                      d. Iron
5. The place from where minerals are taken out by digging is known as a \_\_\_\_\_. 1  
a. Mine    b. Industry                      c. Factory                      d. Extraction
6. \_\_\_\_\_ is not a source of fresh water. 1  
a. River    b. Lake                      c. Stream    d. Sea
7. A \_\_\_\_\_ is a small river that flows and merges into a bigger river. 1  
a. Basin    b. Tributary                      c. Khadar                      d. Sangam
8. \_\_\_\_\_ means not under the control of foreign power. 1  
a. Sovereign                      b. Secular    c. Democratic                      d. Republic
9. \_\_\_\_\_ is the most popular dress worn by the women of India. 1  
a. Saari    b. Salwar kameez                      c. Lehanga                      d. Ghagra Choli
10. Indian classical music has been divided into \_\_\_\_\_ styles. 1  
a. Four    b. Two                      c. Three    d. Six

Q.2. Objective type questions:

1. Name the other names of the parallel ranges of the Himalaya in the given boxes.

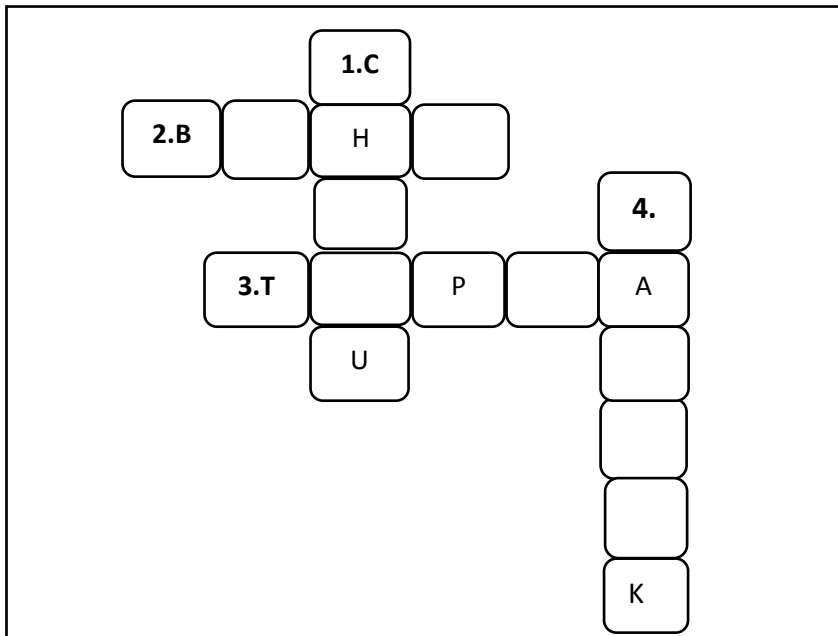
(1×2=02)

The Greater  
Himalaya

The Outer  
Himalaya

**2. Solve the crossword with help of the clues given below.**

**( $\frac{1}{2} \times 4 = 02$ )**



**Across**

- 2. folk dance of Assam
- 3. a form of classical music

**Down:**

- 1. folk dance of Odisha
- 4. classical dance of Uttar

**Q.3. Very short answer questions.**

**(2×3=06)**

1. What is a constitution and when was the Indian constitution finally adopted? 2

**Or**

Does the picture given below tells us about our rights? Why?



2. Explain what rainwater is harvesting and state its importance. 2

**Or**

Isn't clean water a necessity? Why?

3. Why are Northern plains fertile? Which crops are grown here? 2


**Q.4.Short answer questions.**

**(3×3=09)**

1. The Northern mountains are of great importance to India. Support the statement with suitable examples. 3

**Or**

Name and explain the type of farming shown in the picture.



2. Would you prefer to stay on mountains or plains? Why? 3
3. Mention any three fundamental rights. 3

**Q.5. Long answer questions. (2×4=08)**

1. "Conservation of minerals is the need of the hour." Do you agree? Give reasons. 4

*Or*

Complete the table with the help of guidelines given below.

	Characteristics	Sates
Coal		

2. Why are dams also known as multipurpose river valley projects? 4

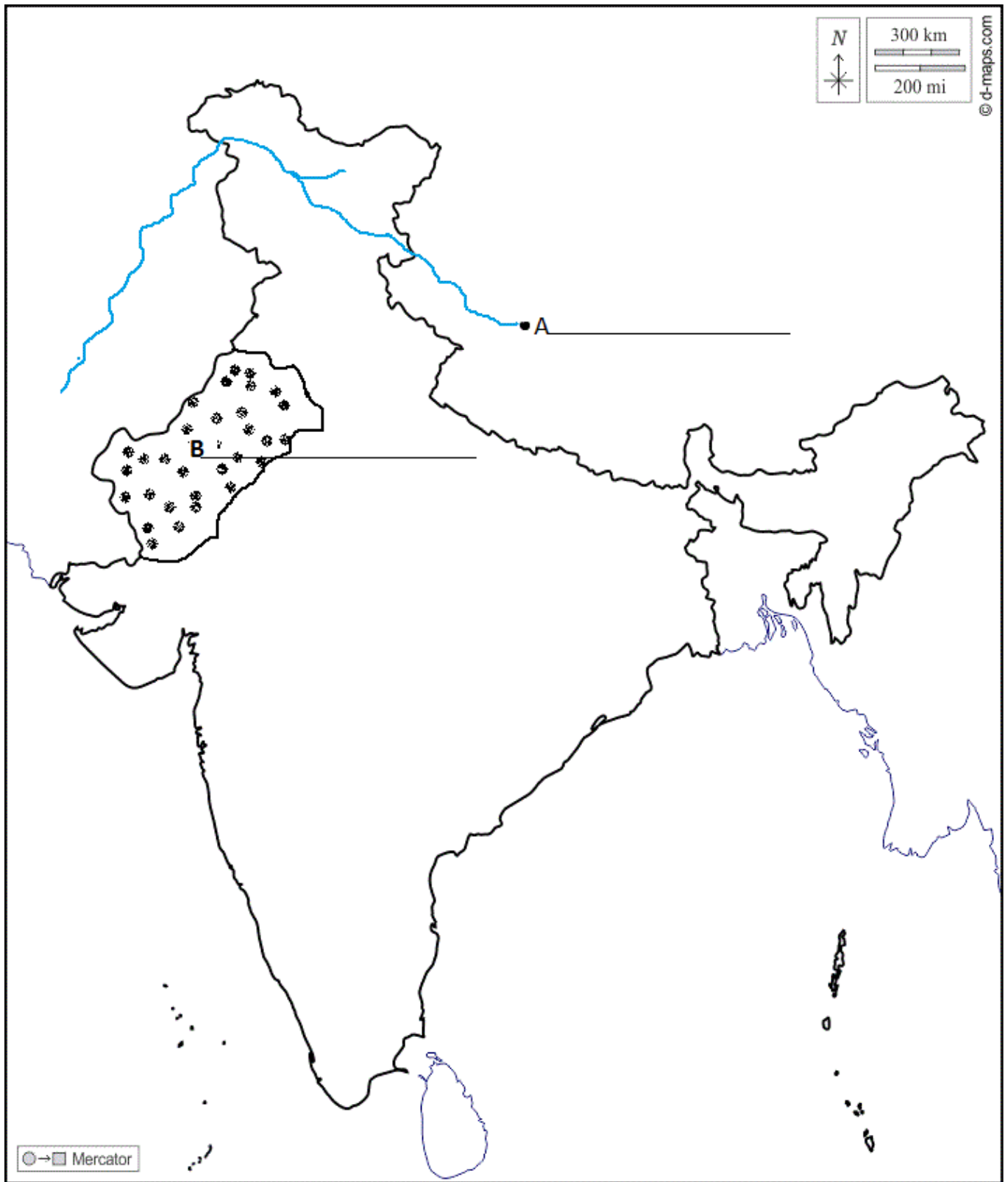
**Q.6. Map Work (1×3=3)**

**1. Two places A and B have been marked on the given outline map of India. Identify them and write their correct names on the lines drawn near them.**

- i. One of the physical features of India 1
- ii. Northern river basin 1

**2. On the same outline map of India locate and label following place.**

- i. Andaman and Nicobar Islands 1



© d-maps.com